



QUEENS' COLLEGE, INDORE

SUMMER ASSIGNMENT

WING- PRIMARY

CLASS - I

Summer Assignment

Class I

Dear Parents,
Warm Greetings!

It was an immense pleasure to witness so much of love and support of our students and parents throughout the Virtual Session 2020-21 and looking forward for same in session 2021-22. QUEENS' Family is here again to support our parents in grooming children during the summer time in a creative and fruitful way. Our Summer Assignment incorporates academic and life skill based activities.

✓ Suggested activities for Students-

- Start everyday with Meditation.
- Have healthy meals together and don't waste food.
- Offer glass of water and serve food to family members.
- Help family members in any house hold chores.
- Clean out your closet.
- Offer prayer daily.
- Give compliment/gratitude to family and be polite with everyone around.
- Take care of plants and feed birds and animals.
- Be responsible and independent in doing your work and set your parents free from your daily tasks.
- Send a virtual message /Give a concern call to your near and dear ones.

✓ Value of the Week connects the conversations between home and school to create positive behaviours and outstanding learning habits in our children.

1. Honesty – Never lie and admit your mistakes. Accept right and deny wrong.
2. Gratitude – Be thankful for everything you have.
3. Caring – Care for people and help them in need.
4. Courage – Develop the ability to fight fear and be ready to face challenges .

✓ Sing Along -

http://tp-api.chrysalis.world/moodle/webservice/pluginfile.php/15429/mod_resource/content/1/Everybody%20Loves%20Shero.mp4?token=f5002e300ea57af319c1dfda8d3b938b

http://tp-api.chrysalis.world/moodle/webservice/pluginfile.php/15430/mod_resource/content/1/Ammu%20and%20Chintu.mp4?token=f5002e300ea57af319c1dfda8d3b938b

http://tp-api.chrysalis.world/moodle/webservice/pluginfile.php/15431/mod_resource/content/1/Foo-Foo.mp4?token=f5002e300ea57af319c1dfda8d3b938b

http://tp-api.chrysalis.world/moodle/webservice/pluginfile.php/15432/mod_resource/content/1/Wonderland.mp4?token=f5002e300ea57af319c1dfda8d3b938b

<http://tp->

✓ Let's watch some videos and try to imbibe these healthy practices in our daily life-

- <https://youtu.be/GEIYCvcOHLw>
- <https://youtu.be/FWw8xgDTFTQ>
- <https://youtu.be/putSNzERfUE>
- <https://youtu.be/hHqqI0gh2h0>
- <https://youtu.be/ulQ7vTsC83A>
- <https://youtu.be/psxlqA2DGlc>

➤ **Kindly note:-**

- ✓ **Children have to revise the topics taught in the month of April.**
- ✓ **Subjective Test would be conducted in the month of June.**
- ✓ **Submission of summer assignment will be latest by June 7, 2021 on GSUITE.**


Regards


❖ **Subject – English**

- ✓ **'All About Me' will help children write basic details about themselves.**
- ✓ **Reading comprehension 'Sizzling Summer'. Read the passage carefully and answer the following questions.**
- ✓ **'Fix It Up' activity. Rewrite the sentences correctly. Begin with capital letter and add correct punctuation in the end.**
- ✓ **A-B-C Activity- Write the given words in A-B-C order.**
- ✓ **Look at the pictures and complete sentences using help box.**
- ✓ **Decorate and present Mother's Day Card to your mom on the occasion of Mother's Day (9 May, 2021)**

ALL ABOUT

I am  years old!

I live in 




I want to be a



when I grow up!

My Friends Are



Favourite colour

Favourite book

Favourite food

Activity 2 -Read the passage carefully and answer the following questions.

Sizzling Summer

Summer, summer,
Lots of fun, fun, fun!
Swimming in the pool,
No school for anyone!

Go on trips; play outside,
The weather nice and hot.

Wear sunscreen while
in the sun,

Do not miss a spot!



1. We wear _____ while in the sun.

- (a) woollen clothes
- (b) sunscreen

(c) oil

2. We go _____ and _____.

- (a) on trips, play outside
- (b) to school, study at home.
- (c) to park, play on swings.

3. The weather is _____ and _____.

(a) windy, dark

(b) rainy, gloomy

(c) nice, hot

Activity 3- Fix it up!! Draw and colour a picture of cupcake and rewrite each sentence correctly. Begin each sentence with a capital letter and add correct punctuation in the end.

1. mom baked cupcakes

2. i ate two cupcakes

3. i shared with my friends

4. will mom make more

5. they were yummy

Activity 4 - Use the help box and write the following words in A-B-C order.

Write the words in ABC order.



1. _____

2. _____

3. _____



4. _____

5. _____

- * pet
- * friend
- * dog
- * love
- * sweet

1. _____

2. _____

3. _____



4. _____

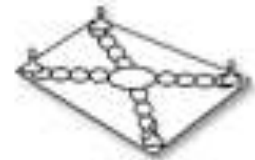
5. _____

- * leash
- * walk
- * collar
- * tag
- * run

Activity 5 - Use the words from the help box and complete the following sentences.

gate cake vase rake
tape game cave cage

I can play a _____.



Did you close the _____?



The _____ is pretty.



Put the bird in its _____.



I like my birthday _____.



The bear is in the _____.



Use the _____ to clean!



Do you see the _____?























Activity 6 – Decorate this Mother’s Day Card and present to your mom on Mother’s Day (9 May, 2021)





















































all about my
























































❖ विषय -हिंदी

- ✓ Write असेअःऔरकसेश्र 2 times in 3 in 1 notebook.
- ✓ Do the worksheets.
- ✓ Learn and write वर्तनीअभ्यास ,वाक्यरचनाऔरप्रश्न - उत्तर of पाठ - "तितलीकाचित्र" in C.W. notebook.
- ✓ Complete page number 10, 15, 16 and 17 in Utkarsh book.

✓ नन्हेहाथोंसे (Activity) Page number 19 and 26 in Utkarsh book.

 QUEENS' COLLEGE, INDORE SESSION: 2021-22	कक्षा: कक्षा गहली विषय - हिन्दी विषय शिक्षक/हस्ताक्षर: विषय शिक्षक/हस्ताक्षर: संचालित/हस्ताक्षर:	<p>प्र.3 आ (1) की मात्रा वाले शब्दों पर चोजा लगाइए।</p> <p>बादल धुम धर आ जागर, कोए को खाना जाग्य। टप-टप पानी बरसा जलग, ताल तलैया भर जाना।</p> <p>प्र.4 चित्र का नाम लिखकर वाक्य पूरे कीजिए।</p> <p>1. गमन  _____ खा।</p> <p>2. रानी  _____ सा।</p> <p>3. कमला  _____ पहन।</p> <p>4. सारला  _____ बजा।</p>																				
<p>नाम: _____</p> <p>उद्देश्य: 'आ' की मात्रा का अभ्यास।</p> <p>प्र.1 सही शब्द चुनकर लिखिए।</p> <table style="width: 100%; border: none;"> <tr> <td style="text-align: center;"></td> <td style="border: 1px solid black; padding: 5px; text-align: center;">बाल</td> <td style="text-align: center;"></td> </tr> <tr> <td style="text-align: center;">_____</td> <td style="border: none; text-align: center;">कान</td> <td style="text-align: center;">_____</td> </tr> <tr> <td style="text-align: center;"></td> <td style="border: 1px solid black; padding: 5px; text-align: center;">हाथ</td> <td style="text-align: center;"></td> </tr> <tr> <td style="text-align: center;">_____</td> <td style="border: none; text-align: center;">नाक</td> <td style="text-align: center;">_____</td> </tr> </table> <p>प्र.2 सही शब्द बनाइए।</p> <table style="width: 100%; border: none;"> <tr> <td style="text-align: center;">ता</td> <td rowspan="4" style="text-align: center; vertical-align: middle;">  ला </td> <td style="text-align: center;">_____</td> </tr> <tr> <td style="text-align: center;">मा</td> <td style="text-align: center;">_____</td> </tr> <tr> <td style="text-align: center;">जा</td> <td style="text-align: center;">_____</td> </tr> <tr> <td style="text-align: center;">का</td> <td style="text-align: center;">_____</td> </tr> </table>			बाल		_____	कान	_____		हाथ		_____	नाक	_____	ता	 ला	_____	मा	_____	जा	_____	का	_____
	बाल																					
_____	कान	_____																				
	हाथ																					
_____	नाक	_____																				
ता	 ला	_____																				
मा		_____																				
जा		_____																				
का		_____																				
शिक्षिका के हस्ताक्षर: _____ दिनांक: _____																						

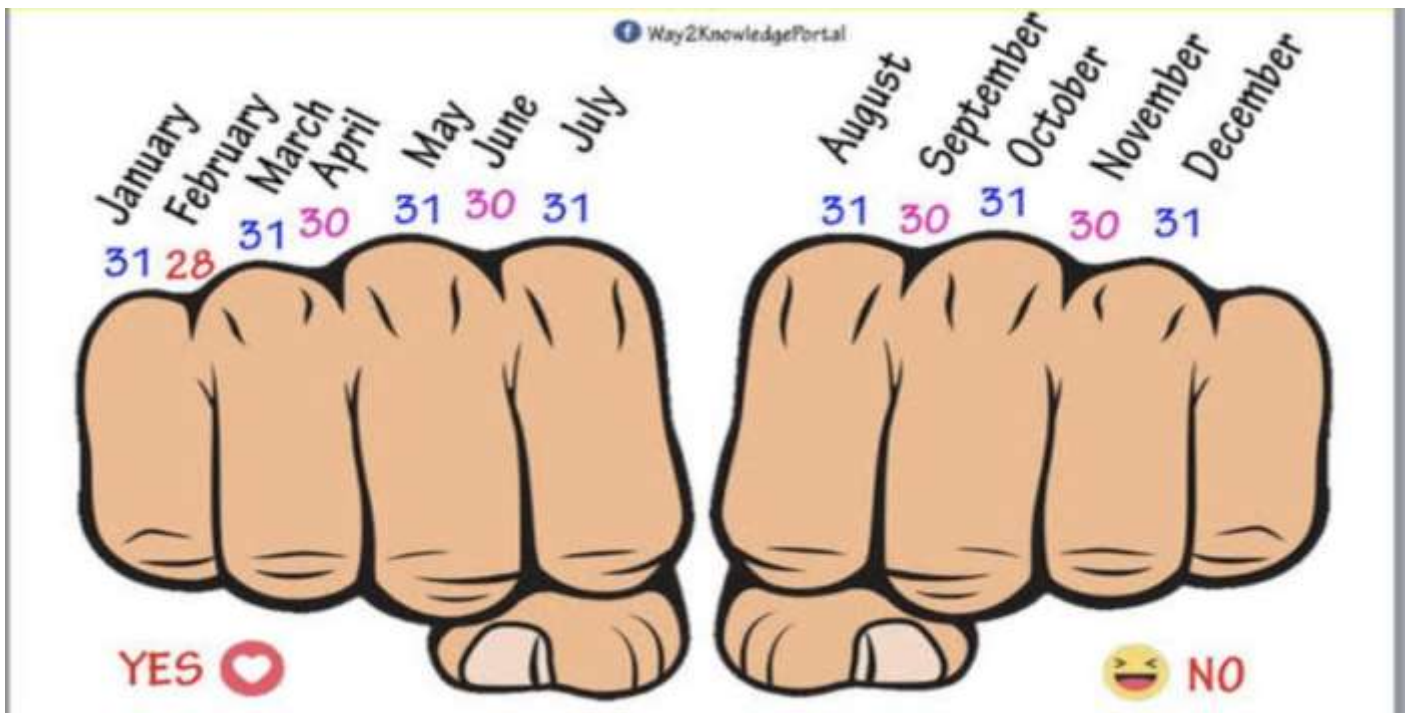
 QUEENS' COLLEGE, INDORE SESSION: 2021-22	क्रमांक..... कक्षा.....पहली..... विषय - हिन्दी विषय विशेषज्ञ हस्ताक्षर..... विषय विशेषज्ञ हस्ताक्षर..... संयोजक हस्ताक्षर.....	प्र.2 सही मात्रा लगाकर शब्द बनाइए। <table border="1" style="width: 100%; border-collapse: collapse;"> <tr> <td style="text-align: center;"></td> <td style="text-align: center;">अ परि</td> </tr> <tr> <td style="text-align: center;"></td> <td style="text-align: center;">त की</td> </tr> <tr> <td style="text-align: center;"></td> <td style="text-align: center;">त ता</td> </tr> <tr> <td style="text-align: center;"></td> <td style="text-align: center;">खरग ग</td> </tr> <tr> <td style="text-align: center;"></td> <td style="text-align: center;">धला</td> </tr> <tr> <td style="text-align: center;"></td> <td style="text-align: center;">बल</td> </tr> <tr> <td style="text-align: center;"></td> <td style="text-align: center;">सपरा</td> </tr> <tr> <td style="text-align: center;"></td> <td style="text-align: center;">भकिया</td> </tr> </table>		अ परि		त की		त ता		खरग ग		धला		बल		सपरा		भकिया		
	अ परि																			
	त की																			
	त ता																			
	खरग ग																			
	धला																			
	बल																			
	सपरा																			
	भकिया																			
नाम:.....																				
प्र.1 सही मात्रा लगाकर शब्द बनाइए। <table border="1" style="width: 100%; border-collapse: collapse;"> <tr> <td style="text-align: center;"></td> <td style="text-align: center;">तराज</td> </tr> <tr> <td style="text-align: center;"></td> <td style="text-align: center;">गलाब</td> </tr> <tr> <td style="text-align: center;"></td> <td style="text-align: center;">धनप</td> </tr> <tr> <td style="text-align: center;"></td> <td style="text-align: center;">बकर</td> </tr> <tr> <td style="text-align: center;"></td> <td style="text-align: center;">हाथ</td> </tr> <tr> <td style="text-align: center;"></td> <td style="text-align: center;">पन</td> </tr> <tr> <td style="text-align: center;"></td> <td style="text-align: center;">कताब</td> </tr> <tr> <td style="text-align: center;"></td> <td style="text-align: center;">त र</td> </tr> <tr> <td style="text-align: center;"></td> <td style="text-align: center;">अ म</td> </tr> </table>				तराज		गलाब		धनप		बकर		हाथ		पन		कताब		त र		अ म
	तराज																			
	गलाब																			
	धनप																			
	बकर																			
	हाथ																			
	पन																			
	कताब																			
	त र																			
	अ म																			
शिक्षिका के हस्ताक्षर:.....		दिनांक:.....																		

 QUEENS' COLLEGE, INDORE SESSION: 2021-22	क्रमांक..... कक्षा.....पहली..... विषय - हिन्दी विषय विशेषज्ञ हस्ताक्षर..... विषय विशेषज्ञ हस्ताक्षर..... संयोजक हस्ताक्षर.....	प्र.2 खाली स्थान भरिए। <table border="1" style="width: 100%; border-collapse: collapse;"> <tr> <td style="text-align: center;"></td> <td style="text-align: center;"></td> <td style="text-align: center;"></td> </tr> <tr> <td style="text-align: center;">_दल</td> <td style="text-align: center;">_ला</td> <td style="text-align: center;">_करी</td> </tr> <tr> <td style="text-align: center;"></td> <td style="text-align: center;"></td> <td style="text-align: center;"></td> </tr> <tr> <td style="text-align: center;">_लक</td> <td style="text-align: center;">_लास</td> <td style="text-align: center;">_छुआ</td> </tr> <tr> <td style="text-align: center;"></td> <td style="text-align: center;"></td> <td style="text-align: center;"></td> </tr> <tr> <td style="text-align: center;">_किया</td> <td style="text-align: center;">_ला</td> <td style="text-align: center;">_ता</td> </tr> </table>				_दल	_ला	_करी				_लक	_लास	_छुआ				_किया	_ला	_ता
																				
_दल	_ला	_करी																		
																				
_लक	_लास	_छुआ																		
																				
_किया	_ला	_ता																		
नाम:.....																				
प्र.1 चित्र देखकर शब्द लिखिए। <table border="1" style="width: 100%; border-collapse: collapse;"> <tr> <td style="text-align: center;"></td> <td>_____</td> </tr> <tr> <td style="text-align: center;"></td> <td>_____</td> </tr> <tr> <td style="text-align: center;"></td> <td>_____</td> </tr> <tr> <td style="text-align: center;"></td> <td>_____</td> </tr> <tr> <td style="text-align: center;"></td> <td>_____</td> </tr> <tr> <td style="text-align: center;"></td> <td>_____</td> </tr> <tr> <td style="text-align: center;"></td> <td>_____</td> </tr> <tr> <td style="text-align: center;"></td> <td>_____</td> </tr> <tr> <td style="text-align: center;"></td> <td>_____</td> </tr> </table>				_____		_____		_____		_____		_____		_____		_____		_____		_____
	_____																			
	_____																			
	_____																			
	_____																			
	_____																			
	_____																			
	_____																			
	_____																			
	_____																			
शिक्षिका के हस्ताक्षर:.....		दिनांक:.....																		

❖ **Subject: Maths**

Note-

- Learn how many days are there in a month by counting it on your knuckles.
- Do all the questions in your 3 in 1 notebook.
- Take help only if required.
- Do the work neat and tidy.
- Revise all the properties of shapes will doing the coloring activity.
- Learn and write tables from 0-5 in your 3 in 1 notebook.



Draw in the hands to show the correct time. The first one has been done for you.










2 o'clock	9 o'clock	5 o'clock
10 o'clock	2 o'clock	7 o'clock

How many minutes are there in an hour?




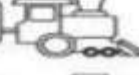


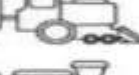
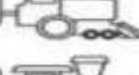



Fill in the boxes.

What comes after?

	12	<input type="text"/>
	19	<input type="text"/>
	21	<input type="text"/>
	29	<input type="text"/>
	33	<input type="text"/>
	42	<input type="text"/>
	47	<input type="text"/>
	49	<input type="text"/>
	52	<input type="text"/>

What comes before?

<input type="text"/>	18	
<input type="text"/>	20	
<input type="text"/>	24	
<input type="text"/>	27	
<input type="text"/>	30	
<input type="text"/>	32	
<input type="text"/>	38	
<input type="text"/>	40	
<input type="text"/>	43	

Practice Counting Backwards #1



Help these pilots arrive at the correct gate by writing down the missing numbers in backwards order on each of the runways below.

Runway 1:

18	<input type="text"/>	16	<input type="text"/>	14	<input type="text"/>
----	----------------------	----	----------------------	----	----------------------

Runway 2:

31	<input type="text"/>	<input type="text"/>	28	27	<input type="text"/>
----	----------------------	----------------------	----	----	----------------------

Runway 3:

15	<input type="text"/>	<input type="text"/>	<input type="text"/>	11	<input type="text"/>
----	----------------------	----------------------	----------------------	----	----------------------

Runway 4:

28	<input type="text"/>	<input type="text"/>	<input type="text"/>	<input type="text"/>	<input type="text"/>
----	----------------------	----------------------	----------------------	----------------------	----------------------

Runway 5:

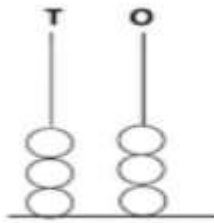
37	<input type="text"/>	<input type="text"/>	<input type="text"/>	<input type="text"/>	32
----	----------------------	----------------------	----------------------	----------------------	----

Runway 6:

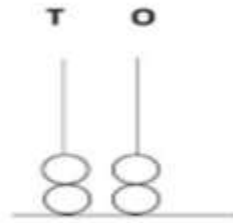
50	<input type="text"/>	<input type="text"/>	<input type="text"/>	<input type="text"/>	<input type="text"/>
----	----------------------	----------------------	----------------------	----------------------	----------------------



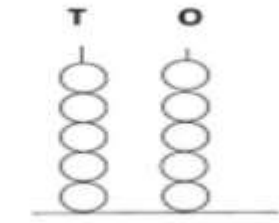
What number does the abacus show?



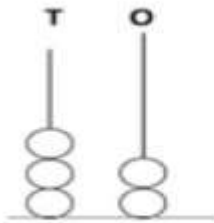
$$\underline{\quad} + \underline{\quad} = \underline{\quad}$$



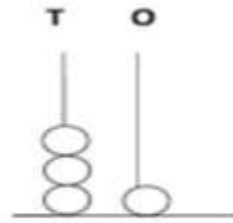
$$\underline{\quad} + \underline{\quad} = \underline{\quad}$$



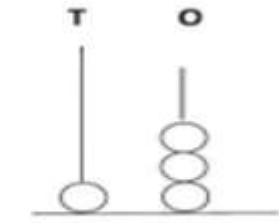
$$\underline{\quad} + \underline{\quad} = \underline{\quad}$$



$$\underline{\quad} + \underline{\quad} = \underline{\quad}$$



$$\underline{\quad} + \underline{\quad} = \underline{\quad}$$



$$\underline{\quad} + \underline{\quad} = \underline{\quad}$$

Fill in the correct tens and ones for the given numbers:

a) $46 = \underline{\quad}$ tens + $\underline{\quad}$ Ones

b) $50 = \underline{\quad}$ tens + $\underline{\quad}$ Ones

c) $34 = \underline{\quad}$ tens + $\underline{\quad}$ Ones

d) $9 = \underline{\quad}$ tens + $\underline{\quad}$ Ones

Write the **expanded form** of the numbers below.

$$23 = \underline{20} + \underline{3}$$

$$55 = \underline{\quad} + \underline{\quad}$$

$$17 = \underline{\quad} + \underline{\quad}$$

$$89 = \underline{\quad} + \underline{\quad}$$

$$96 = \underline{\quad} + \underline{\quad}$$

$$42 = \underline{\quad} + \underline{\quad}$$

$$74 = \underline{\quad} + \underline{\quad}$$

$$68 = \underline{\quad} + \underline{\quad}$$

$$31 = \underline{\quad} + \underline{\quad}$$

$$26 = \underline{\quad} + \underline{\quad}$$

$$\begin{array}{r} \text{T O} \\ 83 \\ + 16 \\ \hline \\ \hline \end{array}$$

$$\begin{array}{r} \text{T O} \\ 54 \\ + 34 \\ \hline \\ \hline \end{array}$$

$$\begin{array}{r} \text{T O} \\ 72 \\ + 26 \\ \hline \\ \hline \end{array}$$

$$\begin{array}{r} \text{T O} \\ 83 \\ + 15 \\ \hline \\ \hline \end{array}$$

$$\begin{array}{r} \text{T O} \\ 27 \\ + 72 \\ \hline \\ \hline \end{array}$$

$$\begin{array}{r} \text{T O} \\ 44 \\ + 45 \\ \hline \\ \hline \end{array}$$

$$\begin{array}{r} \text{T O} \\ 58 \\ + 41 \\ \hline \\ \hline \end{array}$$

$$\begin{array}{r} \text{T O} \\ 50 \\ + 47 \\ \hline \\ \hline \end{array}$$

$$\begin{array}{r} \text{T O} \\ 74 \\ + 25 \\ \hline \\ \hline \end{array}$$

$$\begin{array}{r} \text{T O} \\ 66 \\ + 32 \\ \hline \\ \hline \end{array}$$

$$\begin{array}{r} \text{T O} \\ 42 \\ + 46 \\ \hline \\ \hline \end{array}$$

$$\begin{array}{r} \text{T O} \\ 76 \\ + 13 \\ \hline \\ \hline \end{array}$$

Subtracting 2-digit numbers, no regrouping

Grade 1 Subtraction Worksheet

Find the difference.

$$\begin{array}{r} 1) \quad 3 \\ - 2 \\ \hline \\ \hline \end{array}$$

$$\begin{array}{r} 2) \quad 21 \\ - 10 \\ \hline \\ \hline \end{array}$$

$$\begin{array}{r} 3) \quad 42 \\ - 11 \\ \hline \\ \hline \end{array}$$

$$\begin{array}{r} 4) \quad 12 \\ - 0 \\ \hline \\ \hline \end{array}$$

$$\begin{array}{r} 5) \quad 4 \\ - 1 \\ \hline \\ \hline \end{array}$$

$$\begin{array}{r} 6) \quad 51 \\ - 1 \\ \hline \\ \hline \end{array}$$

$$\begin{array}{r} 7) \quad 43 \\ - 33 \\ \hline \\ \hline \end{array}$$

$$\begin{array}{r} 8) \quad 82 \\ - 0 \\ \hline \\ \hline \end{array}$$

$$\begin{array}{r} 9) \quad 78 \\ - 10 \\ \hline \\ \hline \end{array}$$

$$\begin{array}{r} 10) \quad 76 \\ - 34 \\ \hline \\ \hline \end{array}$$

$$\begin{array}{r} 11) \quad 36 \\ - 6 \\ \hline \\ \hline \end{array}$$

$$\begin{array}{r} 12) \quad 78 \\ - 24 \\ \hline \\ \hline \end{array}$$

$$\begin{array}{r} 13) \quad 21 \\ - 11 \\ \hline \\ \hline \end{array}$$

$$\begin{array}{r} 14) \quad 78 \\ - 51 \\ \hline \\ \hline \end{array}$$

$$\begin{array}{r} 15) \quad 27 \\ - 15 \\ \hline \\ \hline \end{array}$$


$$\begin{array}{r} 16) \quad 46 \\ - 30 \\ \hline \\ \hline \end{array}$$

Write in the symbol that makes the problem true.

> . < or =

1. 35 <input type="text"/> 52	2. 40 <input type="text"/> 74	3. 45 <input type="text"/> 30
4. 84 <input type="text"/> 77	5. 38 <input type="text"/> 64	6. 51 <input type="text"/> 39
7. 43 <input type="text"/> 43	8. 79 <input type="text"/> 28	9. 99 <input type="text"/> 89
10. 23 <input type="text"/> 22	11. 66 <input type="text"/> 77	12. 6 <input type="text"/> 16
13. 98 <input type="text"/> 89	14. 18 <input type="text"/> 18	15. 30 <input type="text"/> 49

On the back of this page, make a shape person or animal.



_____ circles
 _____ rectangles
 _____ squares
 _____ triangles

My face has:

_____ circles
 _____ triangles
 _____ squares

My arms are:

My body is a:

My legs are:

My feet are:

$$0 \times 1 = 0$$

$$0 \times 2 = 0$$

$$1 \times 1 = 1$$

$$1 \times 2 = 2$$

$$2 \times 1 = 2$$

$$2 \times 2 = 4$$

